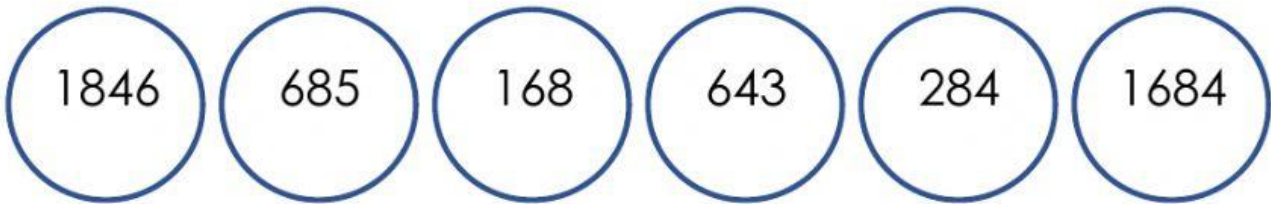


Addition Live Worksheet

Name:

1. Find the sum of 4781 and 3941.

Answer the questions about the numbers in the circles.



2. What is the sum of the 2 largest numbers?

3. Find the total of the 2 smallest numbers.

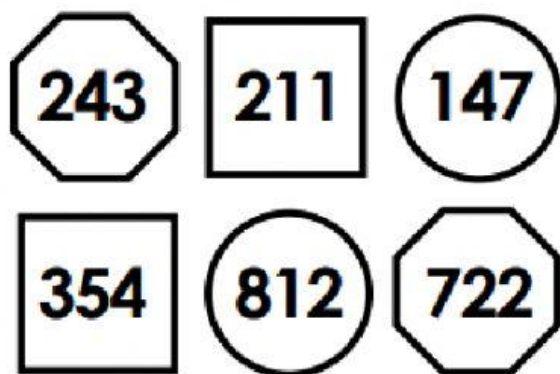
4. Add the two odd numbers.

5. Add the even numbers from in the boxes.

9672	2223	7855	1112
------	------	------	------

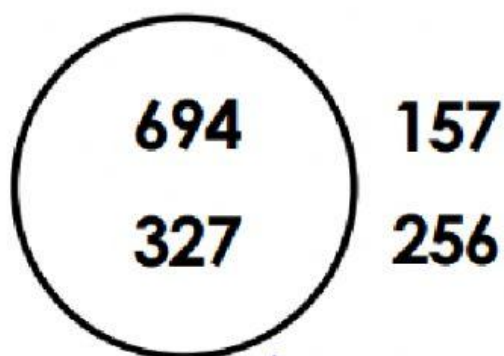
The answer is:

6. Add the numbers in the squares.



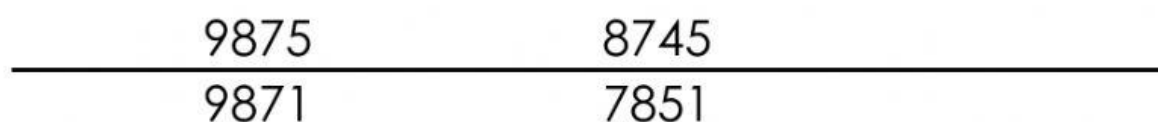
The answer is:

7. Add the numbers outside the circle.



The answer is:

8. Add the numbers below the line.



The answer is: