



Mathematics Evaluation




1. Count the objects and write the numeral and its word name.

	
Numeral: _____ Word name: _____	Numeral: _____ Word name: _____

2. Complete the number sequences below:

Write the number which comes between . 13, <input type="text"/> , 15	Write the number which comes after . 9, 10, <input type="text"/>	Write the number which comes before . <input type="text"/> , 16, 17
--	--	---

3. Choose the set with 12 objects.

		
---	---	---

4. Write the numbers below in Ascending Order:

6	4	12	19	11
---	---	----	----	----

--	--	--	--	--

5. Compare the objects and complete the statements that follow:



The basketball is _____ than the flower.

The flower is _____ than the basketball.

6. How many paperclips is the length of the pencil?



The length of the pencil is _____ paperclips.

7. Choose either $<$ or $>$ to compare the numbers below:

a) 17 \bigcirc 14


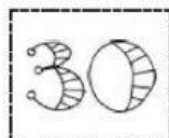
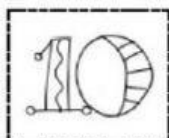
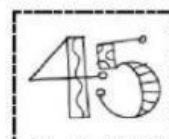
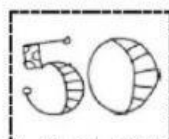

b) 4 \bigcirc 20

8. Place each number in its correct place when counting by 5's.

I can skip count by 5's...

5			20
		40	

Cut out the numbers and paste them in the correct order.



9. Choose the activity that takes **more time**.



10. Using the words below, name each solid shape.

Choose either YES or NO if the solid can Roll, Slide or Stack.


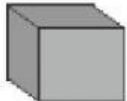



Cuboid

Sphere

Cube

Cylinder

Cone

Shape	Roll	Slide	Stack
	<u>Yes</u>	<u>Yes</u>	<u>No</u>
	_____	_____	_____
	_____	_____	_____
	_____	_____	_____
	_____	_____	_____

11. Select the coins to buy the fruit.



15c







Mrs. Sookoo – Second Year Mathematics Evaluation Test
Friday 6th November 2020

12. The table picture below shows 7 students standing in a line.

Sam is 1st and Tom is 7th in the line.

a) Put in the missing positions in the missing spaces below each student.

						
Sam	Jane	Harry	Tim	Elsa	Anna	Tom
1 st						

b) Complete the sentences:

1. _____ is 4th in the line.

2. Anna is standing in the _____ position.

13. Choose the correct option(s) that equal to \$10.

Option 1:



Option 2:



14. Complete the number sentences below:

a) $7 + 3 + 2 = \underline{\hspace{2cm}}$

b) $16 - 5 = \underline{\hspace{2cm}}$

15. Solve the word problems below:

a) Mark picks **9** cherries on Monday.

He picks **6** more cherries on Tuesday.

How many cherries does Mark have in all?

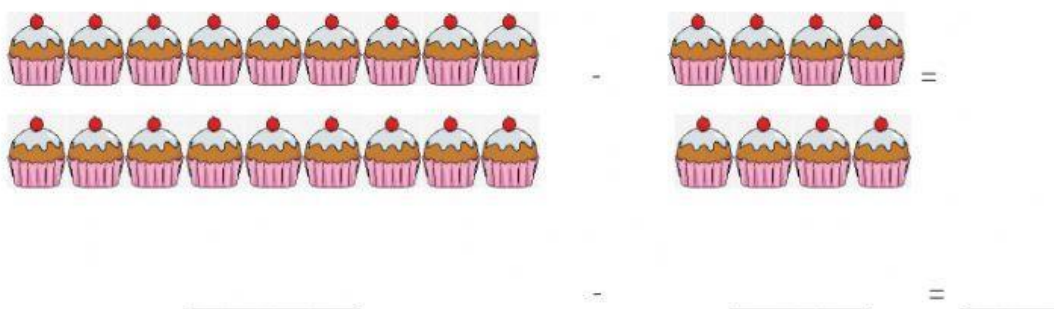


Mark has cherries in all.

b) Pam has **18** cakes.

She gave **8** of the cakes to her friends.

How many cakes does Pam have left?




Pam has cakes left.

16.



\$3



\$8

a) I bought a Ring-Pop and paid with \$5.


















My change was \$ _____.

b) Sally bought a Ring-Pop and a sandwich. She paid with \$20.

Her change was \$ _____.

17. Answer the questions about the Pictograph.

Favourite Ice Cream

Ice Cream Type	Number of Votes
Chocolate 	      
Strawberry 	 
Cookies and Cream 	    

 = 1 vote

a) Which ice cream flavour is the most liked? _____

b) Which ice cream flavour is liked the least? _____

c) How many more students like Cookies and Cream than Strawberry flavoured ice cream? _____

d) How many students are there in all? _____