



MATHLAB ACTIVITY , MENTAL MATH (Fraction)

Name : Class 4 Sec Date __/..... /

1.  How many quarters in a whole ?

 What fraction is shaded red?

2. Mala took $\frac{1}{4}$ th of an hour to go to her friend's birthday party and $\frac{1}{6}$ th hour to come back home .

She tookhour less to travel back home.

3. A cup is filled with hot coffee up to the brim . $\frac{2}{6}$ th of the coffee got spilled . What amount of coffee is left in the cup?

4. Aanya has 5 ribbons . If each ribbon measures $\frac{1}{2}$ metre.


What is the total length of the 5 ribbons in metres.

5. **Write as an addition statement ,multiplication statement and a fraction for the coloured parts.**

Addition Statement:

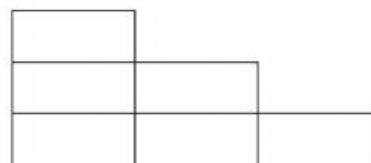
Multiplication Statement :

Fraction Statement :



6. **Write the Fractions in descending order**

$\frac{4}{6}$, $\frac{5}{6}$, $\frac{1}{6}$ →



7. Solve the following:

a) $\frac{3}{4}$ of an hour =x..... = Minutes.

b) $\frac{2}{3}$ of a dozen eggs =.....x.....=eggs.

c) $\frac{2}{3}$ of a day =.....x.....=.....hours.