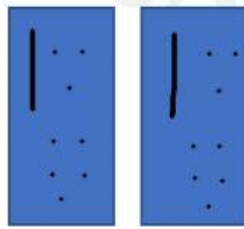
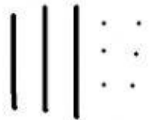


Name _____ Make a Model to divide

Use models to find each quotient. Draw the equal groups.

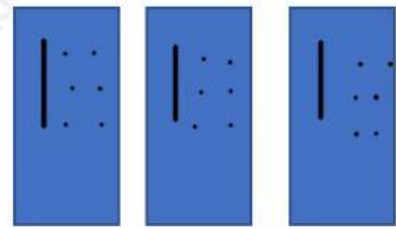
4. $36 \div 2 =$ _____



There is _____ ten and _____ ones in each group.

The remainder is _____.

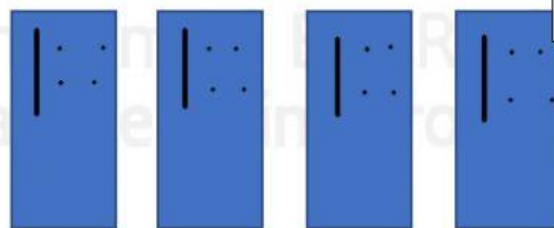
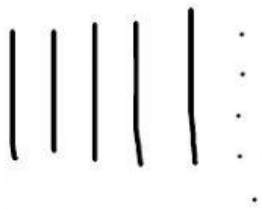
5. $48 \div 3 =$ _____



There is _____ ten and _____ ones in each group.

The remainder is _____.

6. $59 \div 4 =$ _____



Left over



There is _____ ten and _____ ones in each group.

The remainder is _____.