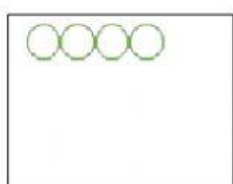

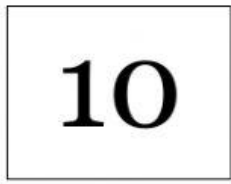


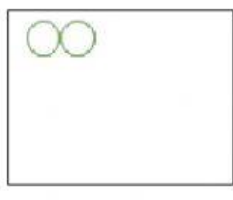
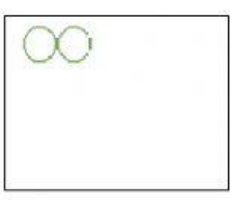

¿CUÁNTO ES EL TOTAL? CALCULA Y UNE CON EL NÚMERO CORRECTO

 +  = 

 +  = 

 +  = 

 +  = 

 +  = 

 +  = 