

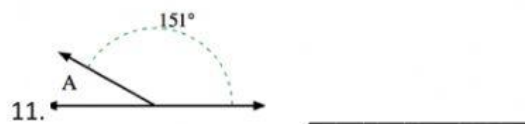
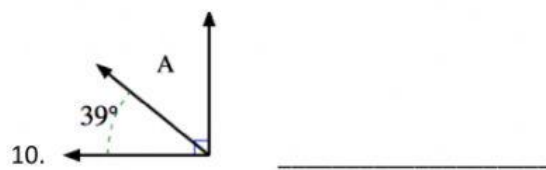
Supplementary and Complementary angles (Test)

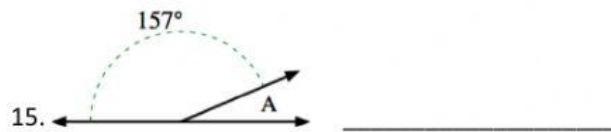
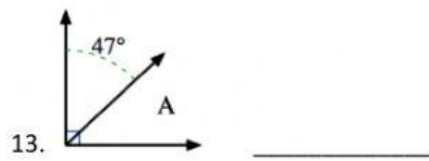
Calculate and fill in the correct answers:

1. A right angle is equal to _____^o.
2. A straight angle is equal to _____^o.
3. A circle has _____^o.
4. A sum of two angles is equal to 90^o _____.
5. A sum of two angles is equal to 180^o _____.

6. $47^\circ + x = 90^\circ$ _____

7. $118^\circ + x = 180^\circ$ _____





16. Angle B is 60° . What is its complement? _____

17. Angle C is 112° what is its supplement? _____

18. Angle F is 63° what is its supplement? _____

19. Angle R is 75° what is its complement? _____

20. Angle C is 112° What is its supplement? _____

21. Extra Credit: If angle D's complement is 26, what is angle D's supplement?
