

Della Montessori Star School  
Grade 1  
FIRST TERM 2020/2021 ACADEMIC SESSION  
Mid Term Test  
Numeracy

NAME.....

ATTEMPT ALL QUESTIONS

1. Fill in the gaps with the correct counting numbers

3, _____,	_____	6, _____,	_____	9
111, _____,	_____	114, _____,	116, _____	
10, _____,	_____	40, _____	60, _____	
_____, 50,	60, _____	_____, 90	_____, 110	

2. Find  $\frac{1}{4}$  of 8 squares = \_\_\_\_\_


3. Find the double of the following

i. 5 = \_\_\_\_\_

ii. 4 = \_\_\_\_\_


iii. 8 = \_\_\_\_\_

iv. 3 = \_\_\_\_\_

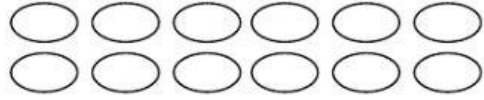
4. Find the half of the following.

i. 8 = \_\_\_\_\_



ii.  $6 = \underline{\hspace{2cm}}$



iii.  $12 = \underline{\hspace{2cm}}$



iv.  $18 = \underline{\hspace{2cm}}$



5. Add up the following

i.

H	T	U
3	1	4
+2	5	3

---

ii.

T	U
4	2
+2	0

---

iii.

H	T	U
5	2	1
+3	7	6

---

iv.

T	U
2	6
+2	3

---