

Read the questions, solve and select the correct option.

NUMERICAL THINKING

1. In the forest there were 795 trees, people cut 167 for their Christmas trees. How many trees are left?

- a. 628
- b. 638
- c. 828
- d. 878



$$\begin{array}{r} 795 \\ - 167 \\ \hline \end{array}$$

2. Peter has a bag with 943 marbles and he lost 610. How many marbles are left?



- a. 123
- b. 231
- c. 333
- d. 378


3. A dog has 293 bones. He finds 112 more. How many bones does he have now?

- a. 405
- b. 301
- c. 203
- d. 181



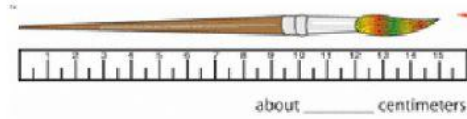
4. There are four boxes with lollipops. Each box has three lollipops. How many lollipops are there altogether?

- a. 20
- b. 18
- c. 12
- d. 10



METRICAL THINKING

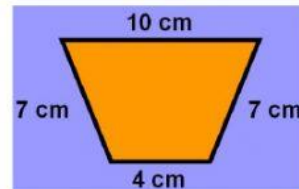
5. Look at the brush length and choose the right answer. What is the length of the



- pen?
- a. 5 cm
 - b. 10 cm
 - c. 15 cm
 - d. 21 cm

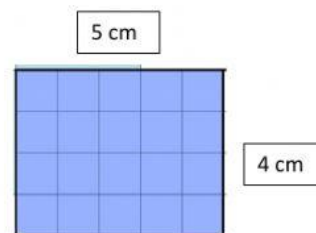
GEOMETRICAL THINKING

6. Find the perimeter of the following shape and choose the correct option



- a. 10 cm
- b. 14 cm
- c. 21 cm
- d. 28 cm

7. Find the area of the given shape



- a. 9 cm^2
- b. 14 cm^2
- c. 20 cm^2
- d. 25 cm^2

8. Choose the correct name of this shape



- a. rectangular prism
- b. pyramid
- c. cone
- d. cylinder

9. Choose the correct option that best describes this object



- a. Cone
- b. sphere
- c. cube
- d. pyramid

10. Select the picture that shows a correct perpendicular line

a.



b.

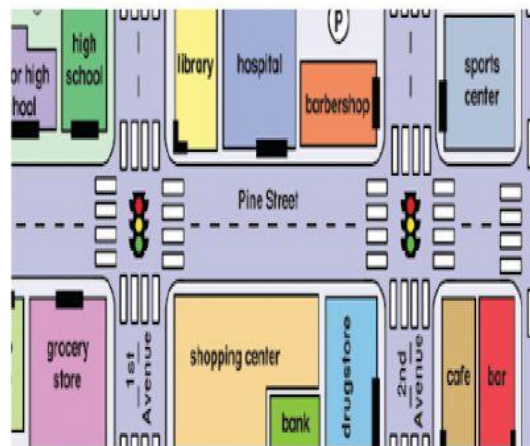


11. What time is it?



- a. 3:00
- b. 4:00
- c. 6:00
- d. 9:00

Taking into account the picture below, answer questions 12 and 13.



12. The library is _____ the hospital.

- a. In front of
- b. Behind
- c. Between
- d. Next to

13. The high school is _____ grocery store.

- a. In front of
- b. Behind
- c. Between
- d. Next to