























































Números decimais - Introdução


Assista o vídeo para te ajudar responder às questões:

Os colegas **Lídia**, **Pedro**, **Júlia**, **Simone** e **Gustavo** estavam brincando com peças do “material dourado”. Escreva

as quantidades de cada um, conforme os valores dados:

 1 cubo = 1 Unid											Lídia
 0,1 placa = 1 décimo											Pedro
 0,01 aste = 1 centésimo											Júlia
 0,001 cubinho = 1 milésimo											Simone
											Gustavo

Agora escreva os números encontrados no Quadro de Ordem e Classes:

	Parte inteira			vírgula	Parte decimal		
	Classe das unidades				d	c	m
	C	D	U				
Lídia				,			
Pedro				,			
Júlia				,			
Simone				,			
Gustavo				,			