





Name:

Class:

Green group

Selaa school wants to buy books for its students , so the principal make alist of books and their prices as follow

Type of clothes	Price
 Math book	15 dirhams
 English book	10 dirhams
 Arabic book	7 dirhams
 Social studies book	5 dirhams

TASK A

1. Use the information from the table to investigate the following:

Which type of books was the most expensive?
Which type of book the least expensive (cheapest)?

TASK B

1. Calculate the **sum** of all books , state only the final answer ,
donot write the whole addition sentence ?

.....
.....

2. What is the sum of the MATH and ARABIC BOOKS?

.....
.....

3. In the previous question you **add** or **subtract**?

.....