

fewer than

## Comparing Groups of Numbers

### Activity 1

more than

Name: \_\_\_\_\_

1. Complete the number sentence below and say which is **more** than or **fewer** than: example:

$$6 - 3 = \underline{3}$$

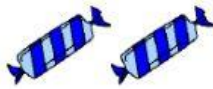


3 is fewer than 6




2.

$$9 - 2 = \underline{\quad}$$




2 is      than 9



3.

$$8 - 4 = \underline{\quad}$$



     is      than     



4.




$$10 - 5 = \underline{\hspace{2cm}}$$

   is    than   



5.



$$8 - 4 = \underline{\hspace{2cm}}$$

   is    than   



6.



$$9 - 3 = \underline{\hspace{2cm}}$$

   is    than   

