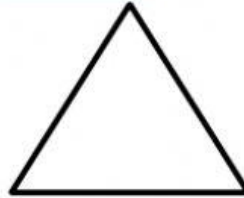






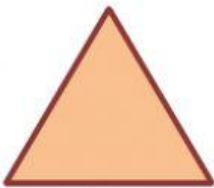
1. Write the name of these shapes :



2. Choose :

- * A square has _____ Sides .
- * A rectangle has _____ Corners .
- * A triangle has _____ vertices . -
- * How many vertices does a circle have ? _____ -

3. Match.



Rectangle

Triangle

Circle