

## Math Test 1

### 1. Write the time.



:



:



:



:

### 2. Solve the following sums and subtractions.

$1 + 3 = \boxed{\phantom{00}}$

$2 + 2 = \boxed{\phantom{00}}$

$3 + 1 = \boxed{\phantom{00}}$

$4 - 2 = \boxed{\phantom{00}}$

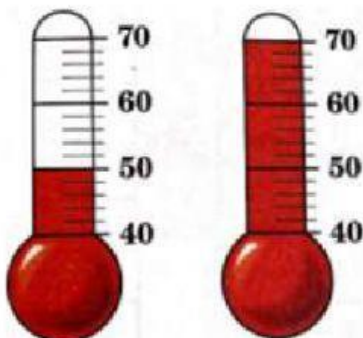
$4 - 1 = \boxed{\phantom{00}}$

$1 + 1 = \boxed{\phantom{00}}$

$4 - 3 = \boxed{\phantom{00}}$

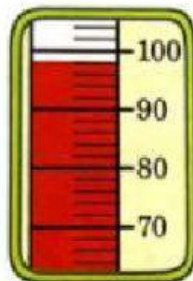
$2 - 1 = \boxed{\phantom{00}}$

### 3. Write the temperatures.

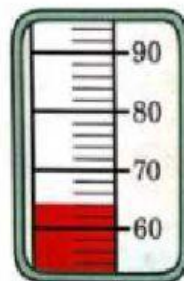


°F

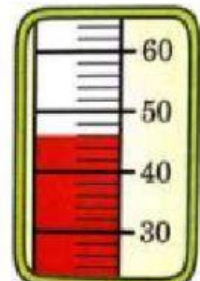
°F



°F



°F



°F

4. Write the numbers in their correct places.

hundreds	tens	ones
★ ★		★ ★

hundreds	tens	ones
★ ★	★ ★ ★ ★	★

hundreds	tens	ones
★ ★	★ ★ ★ ★	★ ★ ★




5. Solve the following bar graph.



a. How many frogs did Laura see?

How many frogs did Ashley see?

How many frogs did they see *altogether*?

+  =  frogs



6. Write >, < or =

$6 - 4$    $1 + 1$

$3 + 3$    $4 + 4$

$7 - 1$    $4 - 3$

=
<
>