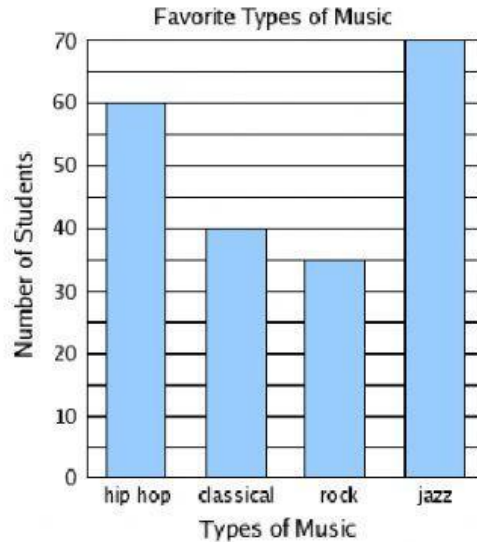


Name:

Date:

Topic: Text and Graphic Features – Tables Graphs Maps Timelines

Directions: Use the information in the chart to answer the following questions.

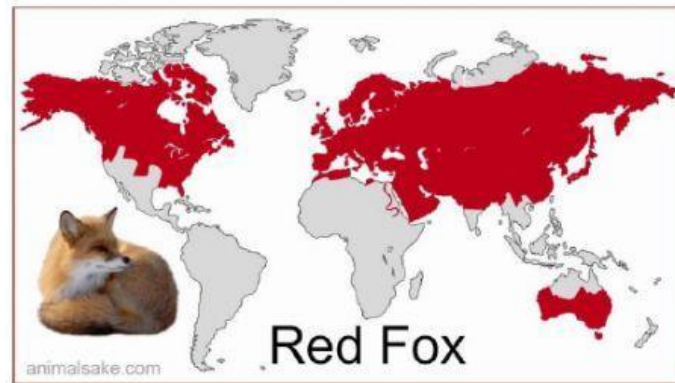


1. What do the bars on the graph represent?
2. Which teacher might need to know this type of information?
3. Which type of music did most students like?

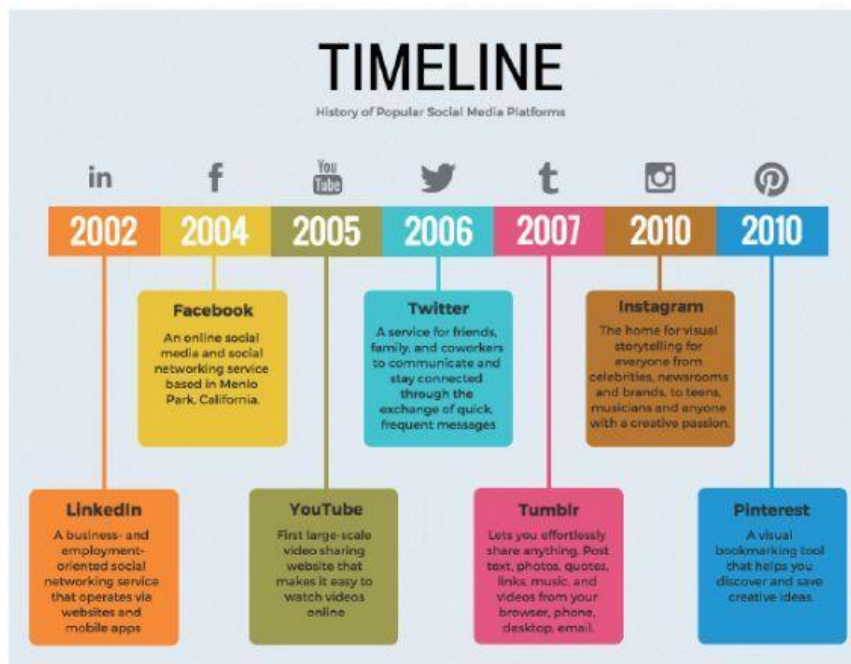
**What is Your Favorite
Kind of Book?**

	Boys	Girls
Mystery	29	23
Adventure	35	28
Science Fiction	14	20
Biography	8	17
Other	5	3

4. What is this table showing?
5. Who liked Science Fiction books more?



6. On how many continents would you find the Red Fox?
7. Name the continent on which you would find only a few Red Fox?



8. When was the first social media platform developed?
9. How many years did it take to get from Facebook to Twitter?
10. Which two social media platforms were developed in the same year?