

# 4th Class - Maths - 4. Knowing numbers

Name -

1. How many 100s are there in a 1000? \_\_\_\_\_
2. How many 200s are there in a 1000? \_\_\_\_\_
3. How many 500s are there in a 1000? \_\_\_\_\_

Fill in the boxes to complete the series.

1. 













1000	1500					4000	
------	------	--	--	--	--	------	--
2. 

2000	3000					8000	
------	------	--	--	--	--	------	--
3. 

2000	4000			
------	------	--	--	--

Write the appropriate number in the box.

				 	
-------------------------------------------------------------------------------------	-------------------------------------------------------------------------------------	--------------------------------------------------------------------------------------	--------------------------------------------------------------------------------------	--------------------------------------------------------------------------------------------------------------------------------------------------------------------------------	--

  	 	  	   	
-------------------------------------------------------------------------------------------------------------------------------------------------------------------------------------------------------------------------------------------------------------------	----------------------------------------------------------------------------------------------------------------------------------------------------------------------------	-------------------------------------------------------------------------------------------------------------------------------------------------------------------------------------------------------------------------------------------------------------------	------------------------------------------------------------------------------------------------------------------------------------------------------------------------------------------------------------------------------------------------------------------------------------------------------------------------------------------------------------------	--