

Geometry Quiz

PART 1: Name That 2D or 3D Shape! Drag the names below to match the correct shape.

Sphere

Rectangle

Pentagon


Pyramid

Rectangular Prism

Octagon


Cone

Parallelogram





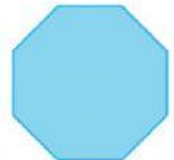




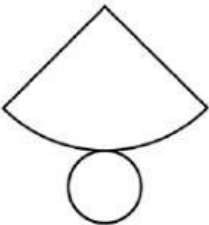
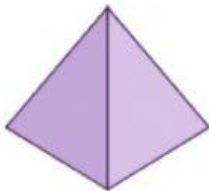
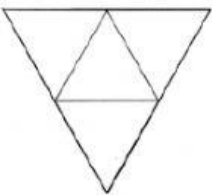

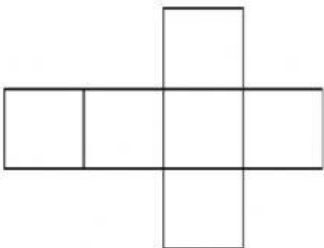

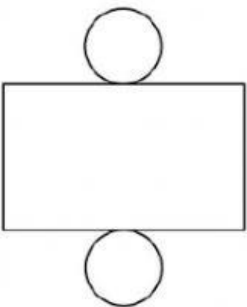
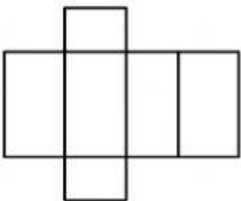
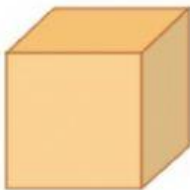




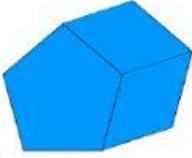







PART 2: Match the shape to its net.



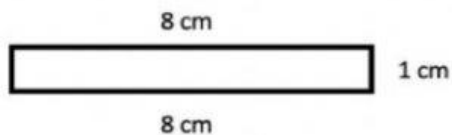
PART 3: Faces, Edges and Vertices! Write down how many faces, edges and vertices each shape has!

SHAPES	NUMBER OF FACES	NUMBER OF EDGES	NUMBER OF VERTICES
			
			
			
			

PART 4: Properties of rectangles!

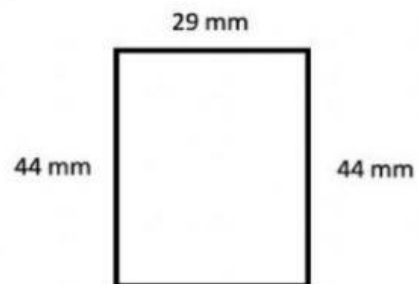
- 1) A rectangle has _____ right angles.
- 2) A rectangle has _____ lines of symmetry.
- 3) Opposite sides of a rectangle are _____ and _____.
- 4) All rectangles have _____ sides and _____ vertices.

5)



Missing side: cm

6)



Missing side: mm