


Name: _____

Temperature







Fill in the missing words.



alcohol hot thermometer cold up

1. Temperature tells us how _____ or _____ something is.
2. It is measured with a _____.
3. When it is hot the mercury or alcohol goes _____.
4. When it is cold the mercury or _____ goes down.

Write hot or cold next to each picture.

5.  _____	6.  _____
7.  _____	8.  _____
9.  _____	10.  _____