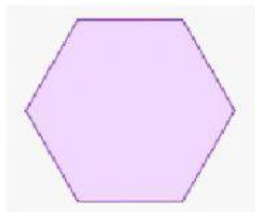


# Polygons


**Direction:** Please choose the correct polygon name for each shape.

Hexagon    Quadrilateral    Octagon    Decagon  
Pentagon    Nonagon    Square    Triangle  
Heptagon

1.



2.




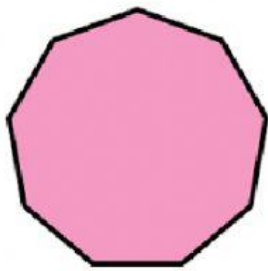
3.



4.



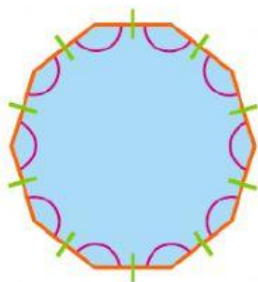
5.



6.



7.



8.



9.

