




**vamos comer pizza** 


clique nas pizzas que representam 1 inteiro



clique nas pizzas que representam  $\frac{1}{2}$



clique nas pizzas que representam  $\frac{1}{4}$



Agora clique nas frações equivalentes às partes selecionadas?

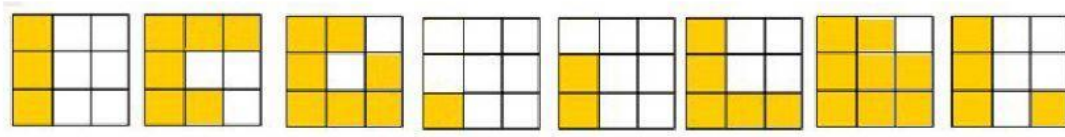
$$\frac{4}{4} \quad \frac{9}{3} \quad \frac{3}{3}$$

$$\frac{3}{4} \quad \frac{2}{4} \quad \frac{1}{3}$$

$$\frac{2}{4} \quad \frac{3}{12} \quad \frac{2}{8}$$

Arraste e solte as frações em ordem crescente (do menor para o maior):

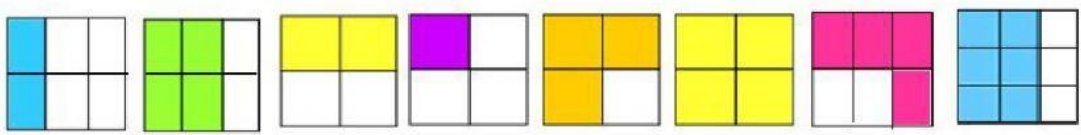
a)



menor							maior

---

b)



menor							maior

Deixe seu comentário