

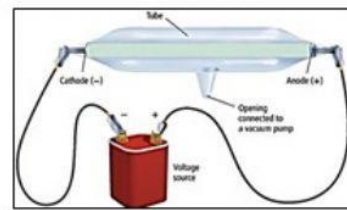
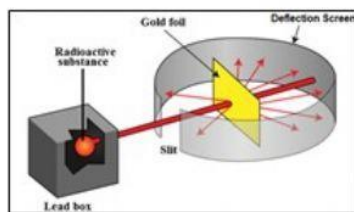
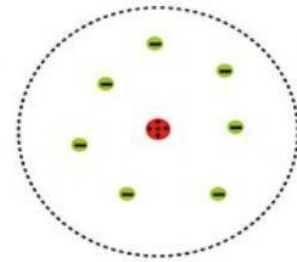
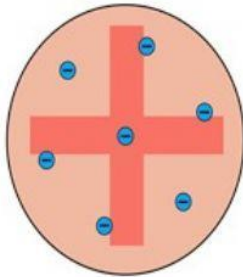
REVIEW DEFINING THE ATOM?



Q2: Put the right name with suitable figure :

(Dalton Model - Thomson model - Rutherford model

Rutherford experiment - Crookes experiment)



Q2: Complete the following table:

Compare Side	Electron	Neutron	Proton
Symbol			
Charge			
Location			

Q3: Explain that atom are neutral?

