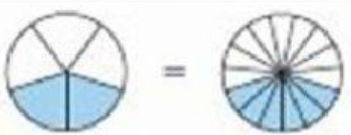
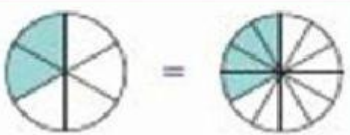
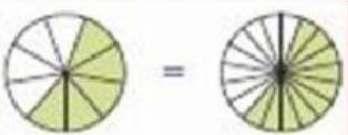



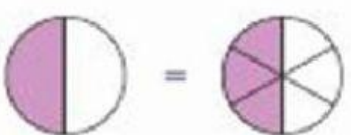
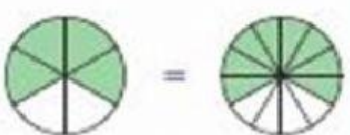
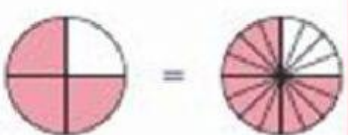

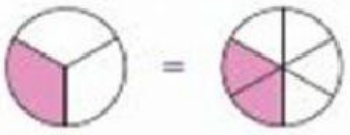
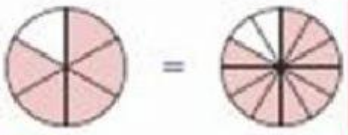


Profª
Estudante

data /
6º Ano

Frações equivalentes

Escreva as frações representadas nas figuras e encontre os pares de frações equivalentes, conforme o exemplo:

1)  $\frac{2}{5} = \frac{6}{15}$	2)  $\frac{\square}{\square} = \frac{\square}{\square}$	3)  $\frac{\square}{\square} = \frac{\square}{\square}$
4)  $\frac{\square}{\square} = \frac{\square}{\square}$	5)  $\frac{\square}{\square} = \frac{\square}{\square}$	6)  $\frac{\square}{\square} = \frac{\square}{\square}$
7)  $\frac{\square}{\square} = \frac{\square}{\square}$	8)  $\frac{\square}{\square} = \frac{\square}{\square}$	9)  $\frac{\square}{\square} = \frac{\square}{\square}$
10)  $\frac{\square}{\square} = \frac{\square}{\square}$	11)  $\frac{\square}{\square} = \frac{\square}{\square}$	12)  $\frac{\square}{\square} = \frac{\square}{\square}$