

Fraction

Put the tick on the right fraction represented by the shaded part of each shape.



1. $\frac{3}{8}$

2. $\frac{2}{8}$


3. $\frac{5}{8}$



1. $\frac{5}{9}$

2. $\frac{3}{9}$

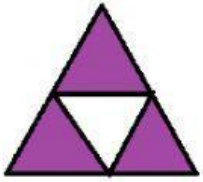
3. $\frac{4}{5}$



1. $\frac{1}{4}$

2. $\frac{3}{4}$


3. $\frac{4}{1}$



1. $\frac{3}{4}$

2. $1\frac{1}{4}$

3. $\frac{4}{3}$



1 $\frac{2}{5}$

2. $\frac{3}{6}$

3. $\frac{5}{6}$