

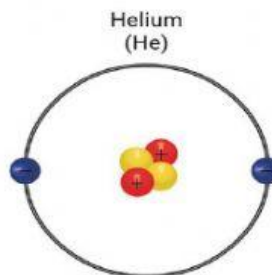
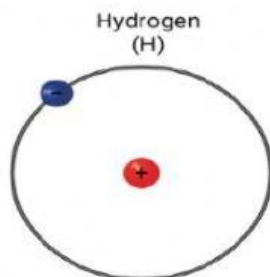
# Atomic Number and Mass Number

Name :

Grade : 7/

Date : 13/10/2020

**Q1. Count the number of protons**

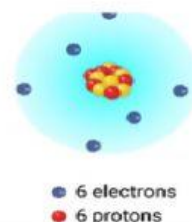


**Q2. Observe the diagram and answer the questions.**

**atomic number** = number of protons

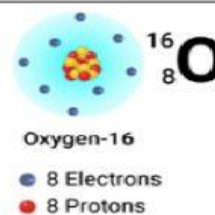
**Question #1**

What is the **atomic number** of carbon?



**Question #2**

What is the **atomic number** of oxygen?

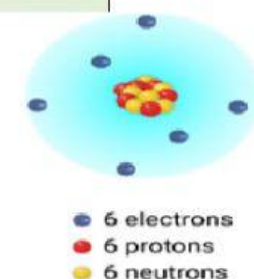


**Q3. Observe the diagram and answer the questions.**

**mass number** = number of protons + number of neutrons

**Question #1**

What is the **mass number** of carbon?



**Question #2**

What is the **mass number** of oxygen?

