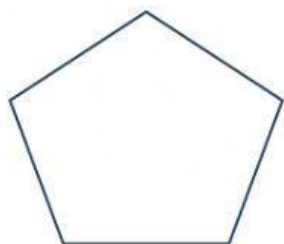


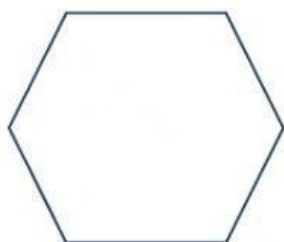
**Q1. Count the number of sides and mark the angles in the following figures.**

---




**Number of sides = .....**

**Number of angles = .....**




**Number of sides = .....**

**Number of angles = .....**



**Number of sides = .....**

**Number of angles = .....**



**Number of sides = .....**

**Number of angles = .....**



**Number of sides = .....**

**Number of angles = .....**