



NOME: _____

PROFESSORA: _____ DATA: _____



1- CONTE QUANTAS CRIANÇAS ESTÃO PARTICIPANDO DE CADA BRINCADEIRA E ESCREVA O NUMERAL CORRESPONDENTE:





2- VAMOS COMPLETAR A RODADA DO DOMINÓ COM AS PEÇAS QUE ESTÃO FALTANDO. LEMBRE-SE QUE AS DUAS PONTAS DEVEM TER A MESMA QUANTIDADE:





3- FAÇA A SOMA ENTRE AS PEÇAS DO DOMINÓ:





$$\square + \square = \square$$



$$\square + \square = \square$$



$$\square + \square = \square$$



$$\square + \square = \square$$