


Odd and Even Numbers

Name: _____ Score: _____




Count the objects and tell whether there is an odd or even number of objects



How many sheep? _____

Odd or even? _____




How many bananas? _____

Odd or even? _____



How many babies? _____

Odd or even? _____



How many cats? _____

Odd or even? _____



How many frogs? _____

Odd or even? _____