

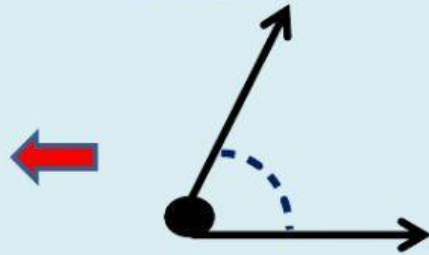
KVS RO AND ISC-II FOR PRTS 2020-21

INTERACTIVE WORKSHEET CLASS :V, SUBJECT: MATHS

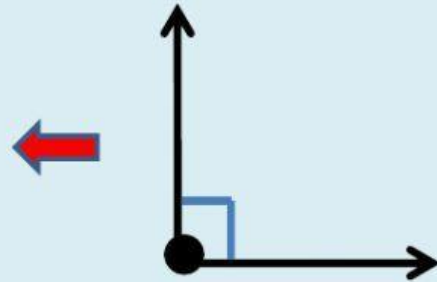
Q.2 Match the following types of angles with their correct figure.

Note: Drag lines to match the arrows.

Right Angle →



Obtuse Angle →



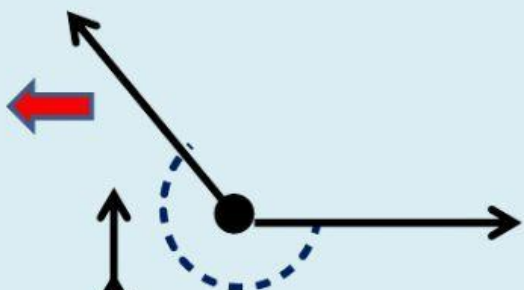
Acute Angle →



Reflex angle →



Complete Angle →



Straight angle →

