








KVS RO AND ISC-II FOR PRTS 2020-21

INTERACTIVE WORKSHEET CLASS :V, SUBJECT: MATHS

Q.1 Find the number of sides and number of angles of the following shapes.

Note: Enter the digits only

SHAPES	No. of Sides	No. of Angles
	<input type="text"/>	<input type="text"/>
	<input type="text"/>	<input type="text"/>
	<input type="text"/>	<input type="text"/>
	<input type="text"/>	<input type="text"/>
	<input type="text"/>	<input type="text"/>
	<input type="text"/>	<input type="text"/>
	<input type="text"/>	<input type="text"/>