


Sybil Strachan Primary School

Numeracy Test 2020

Grade: 4



Name: _____

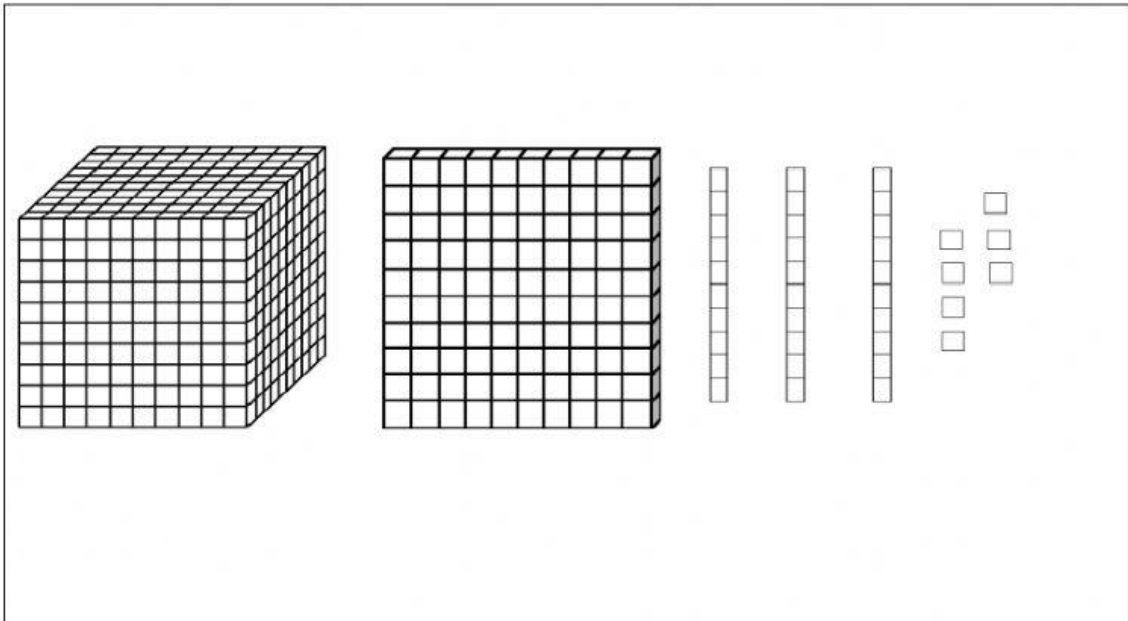
Teacher: _____

Mathematical Concepts

(12 marks)

Answer ALL questions

1. Write the number that the model shows.



Answer: _____ (1)

2. Write the value of the underlined digit in the number below.

38 205 _____ (1)





3. Write the place value of the underlined digit in this number.

125 906 _____ (1)

4. Write the numeral for one thousand, two hundred fifty-nine.

Answer: _____ (1)

5. Write the number that this place value chart shows.

Thousands	Hundreds	Tens	Ones
			

Answer: _____ (2)

Use the numbers in this chart to answer questions 6 and 7.

21 458	15 682	82 165	68 251
--------	--------	--------	--------

6. Write the number in which 2 is equal to 200.

Answer: _____ (1)

7. Write the number in which 5 has the least value.

Answer: _____ (1)

8. Choose the set, which shows the numbers written in order from greatest to least. (2)

A
694 756 908

B
452 399 267

9. Round the numbers to the nearest hundreds.

a) 158 _____ b) 145 _____ 549 _____ (1)

10. Write the number from the box that is a multiple of 5.

36	23	15	1
----	----	----	---

Answer: _____ (1)

