

ATIVIDADE ONLINE

08/10/2020

ATIVIDADE DE MATEMÁTICA


OBSERVE O EXEMPLO:

TOTAL DE DEZENAS DE CADA GRUPO:


ESCREVA A QUANTIDADE TOTAL DE BALAS E O



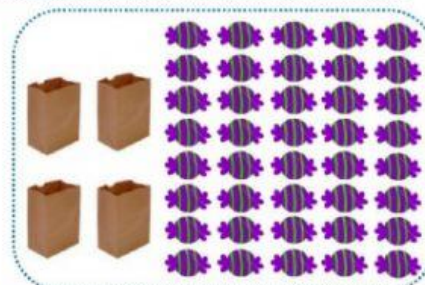
10
↓
1 DEZENA




DEZENAS



DEZENAS

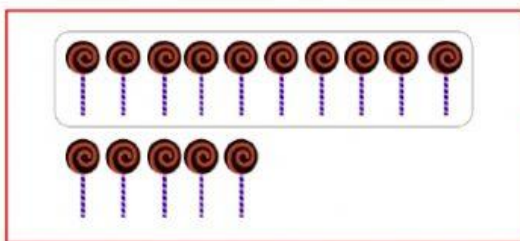


DEZENAS



DEZENAS

CONHECENDO O QUADRO VALOR DE LUGAR




TOTAL DE
PIRULITOS

15



DEZENA	UNIDADE
1	5



TOTAL DE
PIRULITOS



DEZENA	UNIDADE



VOCÊ CONSEGUIU
DESCOBRIR O
SEGREDO?

NO NÚMERO 15
O 1 REPRESENTA
A DEZENA E O 5 AS
UNIDADES!

