


RIGHE E COLONNE


OSSERVA CIASCUNO SCHEMA E RISPONDI ALLE DOMANDE



QUANTE RIGHE?

QUANTE COLONNE?

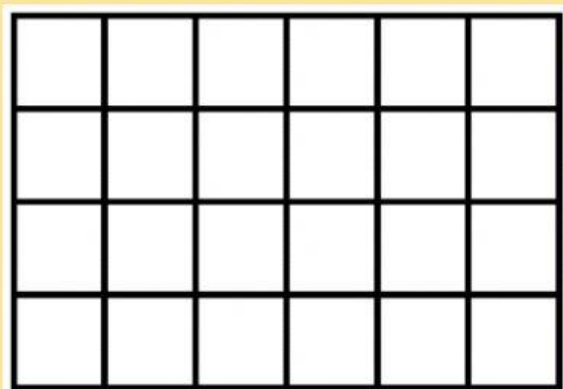
QUANTE CASELLE?



QUANTE RIGHE?

QUANTE COLONNE?

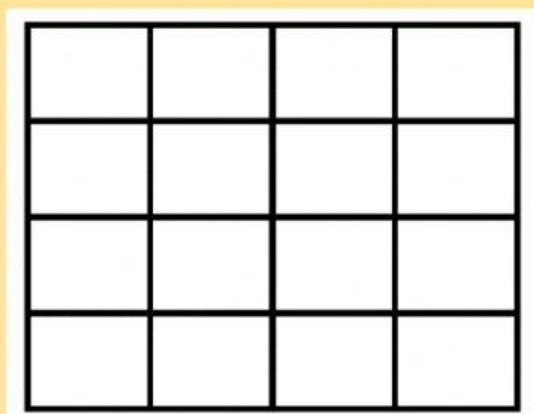
QUANTE CASELLE?



QUANTE RIGHE?

QUANTE COLONNE?

QUANTE CASELLE?



QUANTE RIGHE?

QUANTE COLONNE?

QUANTE CASELLE?