

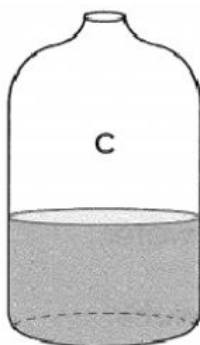

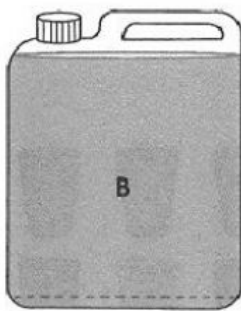
Mathematics

Volume and Capacity

Exercise 2 Liters

Friday

1. Fill in the blanks.



- a) Bottle _____ contains a smaller volume of water than Bottle C.
- b) Bottle _____ contains a greater volume of water than Bottle C.
- c) Bottle _____ contains the smallest volume of water.
- d) Bottle _____ contains the greatest volume of water.