


Area


Obj: I can find the Area by Counting Squares.

1)




Area = _____ cm^2

2)




Area = _____ cm^2

3)



Area = _____ cm^2

4)




Area = _____ m^2

5)



Area = _____ m^2

6)



Area = _____ m^2

7)



Area = _____ km^2

8)



Area = _____ km^2

9)




Area = _____ km^2

10)




Area = _____ ft^2

11)



Area = _____ yd^2

12)



Area = _____ in^2