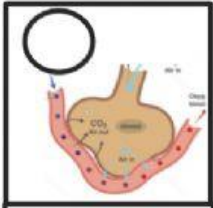
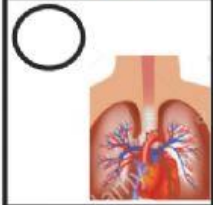


1. Write the order (1,2,3) of the process and drag the correct process



we breathe in



Exchange of gases

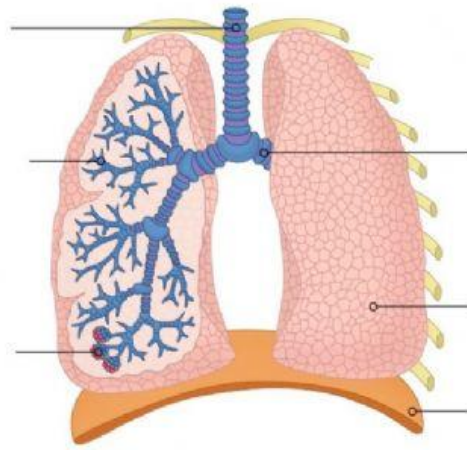


Air goes down the trachea into the lungs

Name - \_\_\_\_\_

class - 5 \_\_\_\_\_

2. Drag the labels to the parts



diaphragm

trachea

bronchiole

lung

bronchi

alveoli

3. Write down the gases

inhale -

exhale -