

Name \_\_\_\_\_





## Mid-Chapter Checkpoint



Personal Math Trainer

Online Assessment  
and Intervention

### Concepts and Skills


Use  to show adding to.  
Draw the . Write the sum.

1. 3 bugs and 4 more bugs

$$3 + 4 = \underline{\quad}$$

2. 4 seals and 2 more seals

$$4 + 2 = \underline{\quad}$$

Use  to solve. Draw to show your work.  
Write the number sentence and how many.

3. There are 5 red marbles and  
4 blue marbles. How many  
marbles are there?

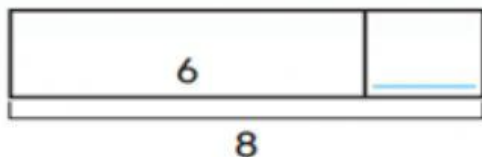
\_\_\_\_\_ marbles



Personal Math Trainer



4. **THINK SMARTER +** There are 6 bunnies in the garden.  
More bunnies join them. Then there are 8 bunnies  
in the garden. How many bunnies join them?



$$6 + \underline{\quad} = 8$$