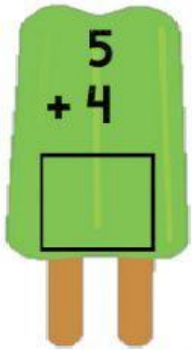
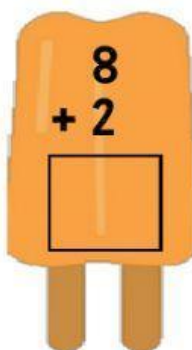

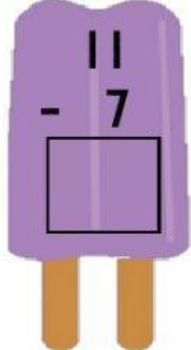
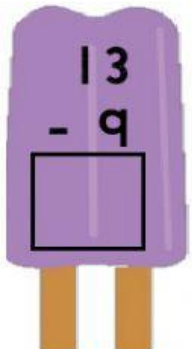
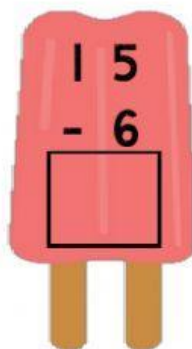
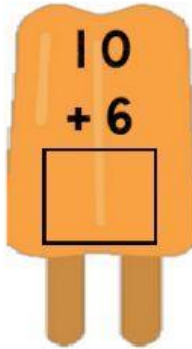
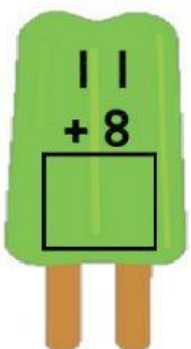
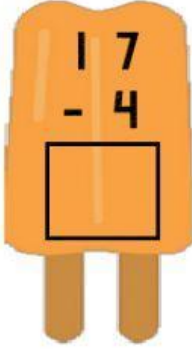
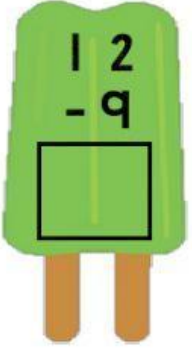
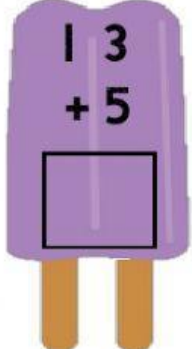
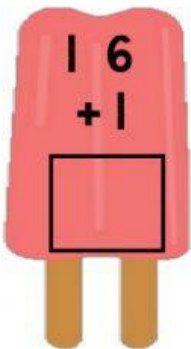

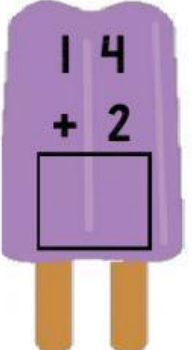
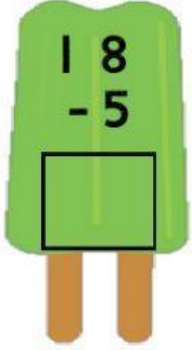
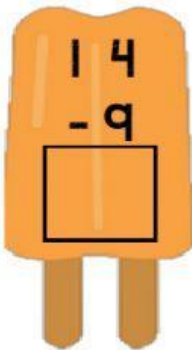


Name: \_\_\_\_\_



# Addition & Subtraction to 20

Directions: Find the sums and differences.

 $\begin{array}{r} 5 \\ + 4 \\ \hline \end{array}$	 $\begin{array}{r} 8 \\ + 2 \\ \hline \end{array}$	 $\begin{array}{r} 9 \\ - 4 \\ \hline \end{array}$	 $\begin{array}{r} 11 \\ - 7 \\ \hline \end{array}$
 $\begin{array}{r} 13 \\ - 9 \\ \hline \end{array}$	 $\begin{array}{r} 15 \\ - 6 \\ \hline \end{array}$	 $\begin{array}{r} 10 \\ + 6 \\ \hline \end{array}$	 $\begin{array}{r} 11 \\ + 8 \\ \hline \end{array}$
 $\begin{array}{r} 17 \\ - 4 \\ \hline \end{array}$	 $\begin{array}{r} 12 \\ - 9 \\ \hline \end{array}$	 $\begin{array}{r} 13 \\ + 5 \\ \hline \end{array}$	 $\begin{array}{r} 16 \\ + 1 \\ \hline \end{array}$
 $\begin{array}{r} 8 \\ + 7 \\ \hline \end{array}$	 $\begin{array}{r} 14 \\ + 2 \\ \hline \end{array}$	 $\begin{array}{r} 18 \\ - 5 \\ \hline \end{array}$	 $\begin{array}{r} 14 \\ - 9 \\ \hline \end{array}$