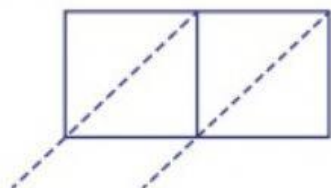


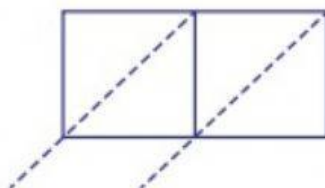
Use lattice multiplication method to find the product in each problem.

1)  $32 \times 6$



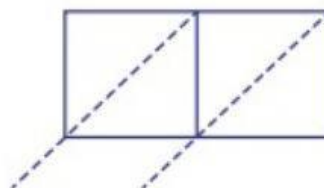
$32 \times 6 = \underline{\hspace{2cm}}$

2)  $45 \times 2$



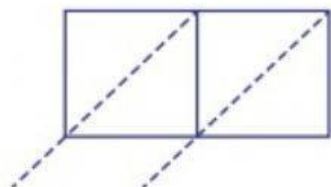
$45 \times 2 = \underline{\hspace{2cm}}$

3)  $18 \times 7$



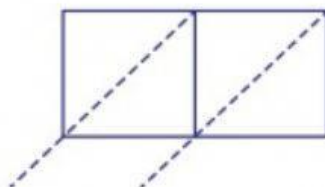
$18 \times 7 = \underline{\hspace{2cm}}$

4)  $67 \times 3$



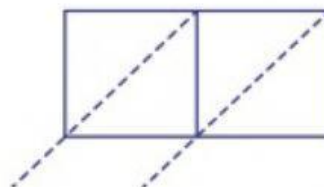
$67 \times 3 = \underline{\hspace{2cm}}$

5)  $53 \times 8$



$53 \times 8 = \underline{\hspace{2cm}}$

6)  $92 \times 4$



$92 \times 4 = \underline{\hspace{2cm}}$