



Unit 1



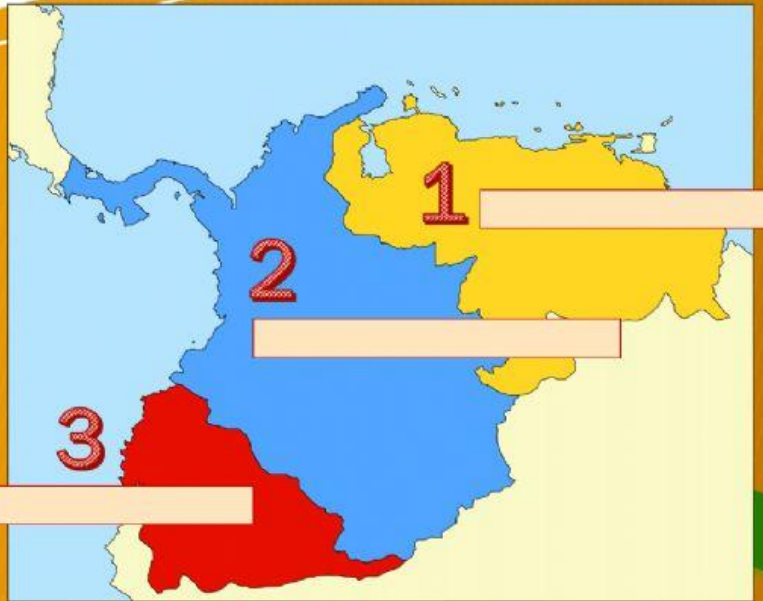
The Republic of Ecuador

What happened after the independence?



This is La Gran Colombia map.
Select the correct name for each region.


La Gran
Colombia



Simon Bolivar

True or False?

- He wanted democratic systems.
- He didn't want to form a big nation (Mexico to Argetina).
- We form part of La Gran Colombia in these days.




"America's freedom is everybody's hope"

The Republic of Ecuador

True or false?

- On May 13, 1830, our first Constitution was created.
- Our territory had 5 regions: Guayas, Quito, Azuay, Riobamba and El Oro.
- Juan José Flores was our vicepresident.



This is our first map.

Write the correct name of each region.

Options: Guayas, Azuay, Quito.



Important!!!

The Republic
of Ecuador

First territorial division



Write the correct name of each social group.

Options: Mestizos, Afro-descendants, Creoles or Indigenous people.

Social Groups

_____ were the offspring of Spaniards born in the Americas. They owned extensive lands and held public office. Some members of the clergy were part of this social group.



_____ were the descendants of Spanish and Indigenous parents. Some had access to education. In general, they were owners of smaller properties or real estate, and engaged in trade and all kinds of crafts (clothing, furniture, shoes, domestic items, etc.). They could not hold public office.



_____ who lived in the cities worked as domestic employees in the homes of the Creoles or worked for Mestizos in their productive activities. They performed work as water carriers, porters, etc. Those who lived in the rural sector worked in haciendas. Some lived on the haciendas and others on communal lands.



_____ were kept in a condition of slavery until 1852. As with Indigenous peoples, those who lived in the cities worked in the houses of the Creoles or Mestizos; and those who lived in rural areas labored in the haciendas, carrying out agricultural activities.

