



# Onde estão as multiplicações?

Atividade retirada do livro de  
Luzia Faraco Ramos Faifi

*Cálculos com resultado até 50.*



EXEMPLO:

$$3 \times 8 = 24$$




ARRASTE O CONJUNTO  
CORRETO ATÉ O  
QUADRO E COLOQUE O  
RESULTADO

$$2 \times 4 =$$



$$3 \times 5 =$$




$$4 \times 4 =$$







$$3 \times 3 =$$



$$4 \times 6 =$$






$$2 \times 5 =$$

