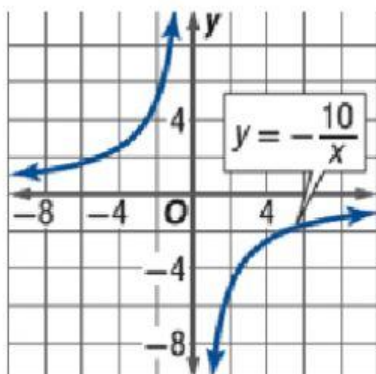
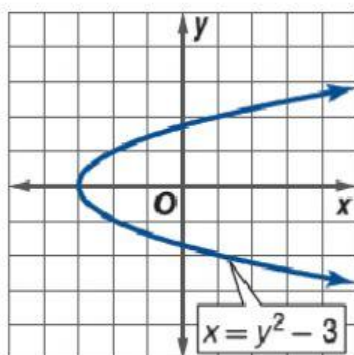


Use the graph of each function to test for symmetry with respect to x-axis, y-axis, and the origin

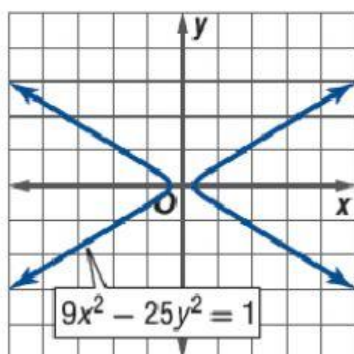


Symmetric with respect to x-axis

Symmetric with respect to y-axis



Symmetric with respect to the origin



Not Symmetric