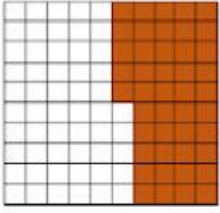
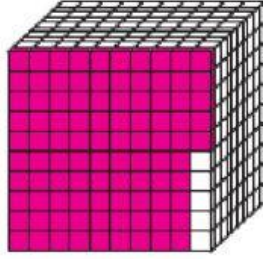



اكتب العدد العشري الذي يمثل الجزء المظلل :




\_\_\_\_\_



\_\_\_\_\_



\_\_\_\_\_



\_\_\_\_\_