

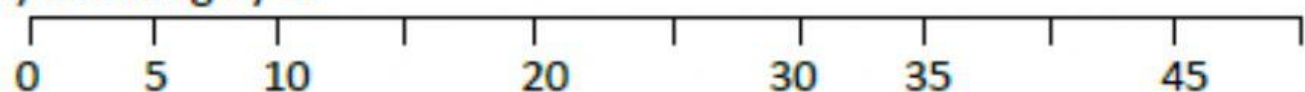


NUMBER LINES TO 200 SHEET 2

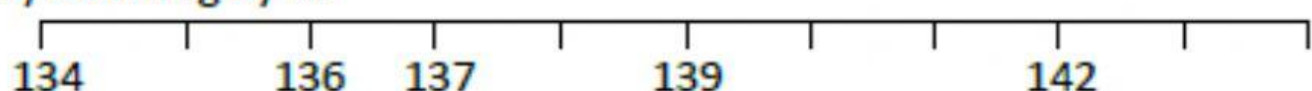
These number lines are going up by 1s, 5s and 10s.

Write in the missing numbers on the number lines.

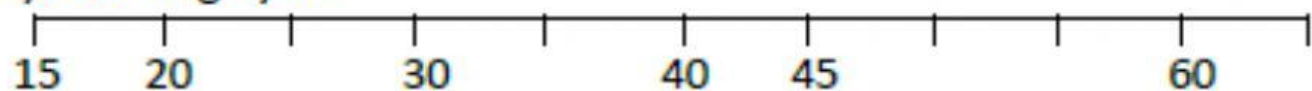
1) Counting by 5s



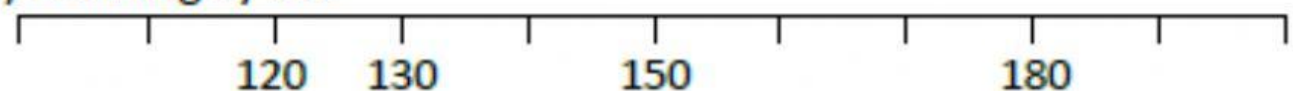
2) Counting by 1s



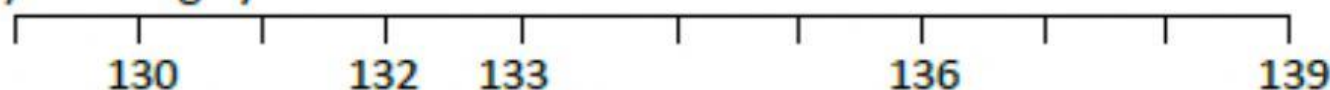
3) Counting by 5s



4) Counting by 10s



5) Counting by 1s



6) Counting by 1s

