




O S D A V Public School, Kaithal

Class –I

Subject – Maths

Fill in the boxes.

What comes after?



12




19




21


What comes before?



18



20



24

Missing number

1) 4 6 8

2) 17 18 21 22

Between number

26	<input type="text"/>	28	31	<input type="text"/>	33
25	<input type="text"/>	27	39	<input type="text"/>	41
28	<input type="text"/>	30	24	<input type="text"/>	26