

ADDITION WITH BLOCKS

Click and drag the number on the right that answers the addition problem on the left.





$$3 + 2 = \underline{\quad}$$

7



$$4 + 3 = \underline{\quad}$$

6




$$2 + 4 = \underline{\quad}$$

5



$$3 + 2 = \underline{\quad}$$



$$1 + 5 = \underline{\quad}$$

8


2



$$2 + 6 = \underline{\quad}$$

5

6



$$1 + 1 = \underline{\quad}$$