



PAKISTAN INTERNATIONAL SCHOOL JEDDAH – (English Section)
First Term 2020– 2021

Subject	Unit	Lessons	Type of Sheet
Mathematics	1	6 – 7 - 8	Reinforcement sheet
Name:		Y 2-	Date:

Q1. Write the number on the number line and TICK the 10 that it rounds to.

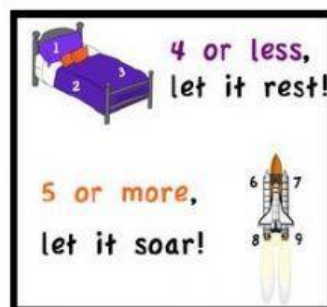
a. 31



b. 86



c. 23



Q2. Fill in the missing ordinal numbers to show the position of the birds.




	2nd				6th	
--	------------	--	--	--	------------	--

Q3. Count the flowers and write the number. Then write if they are odd or even



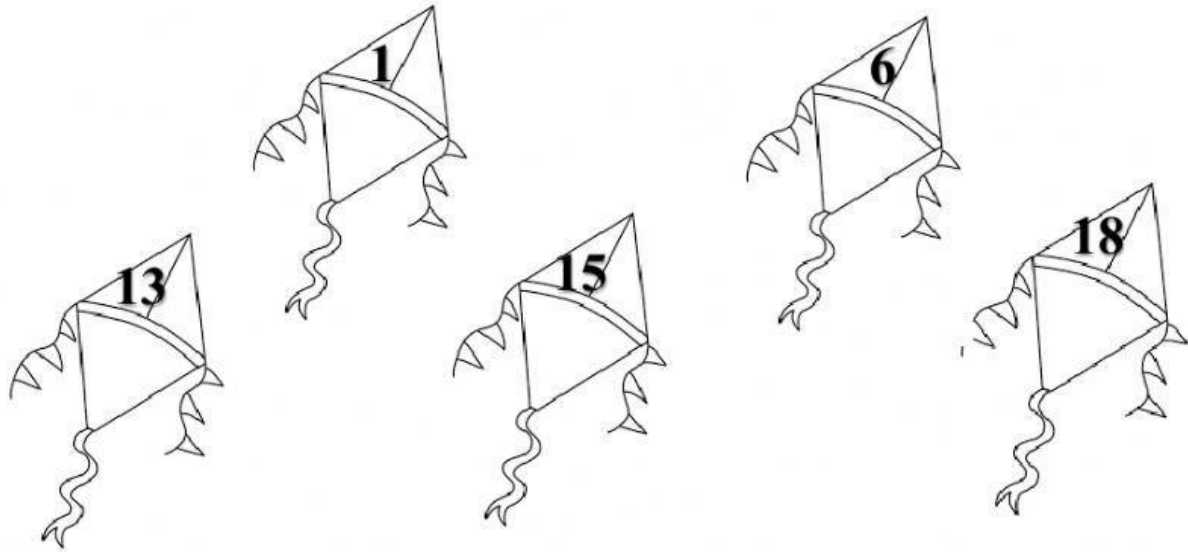




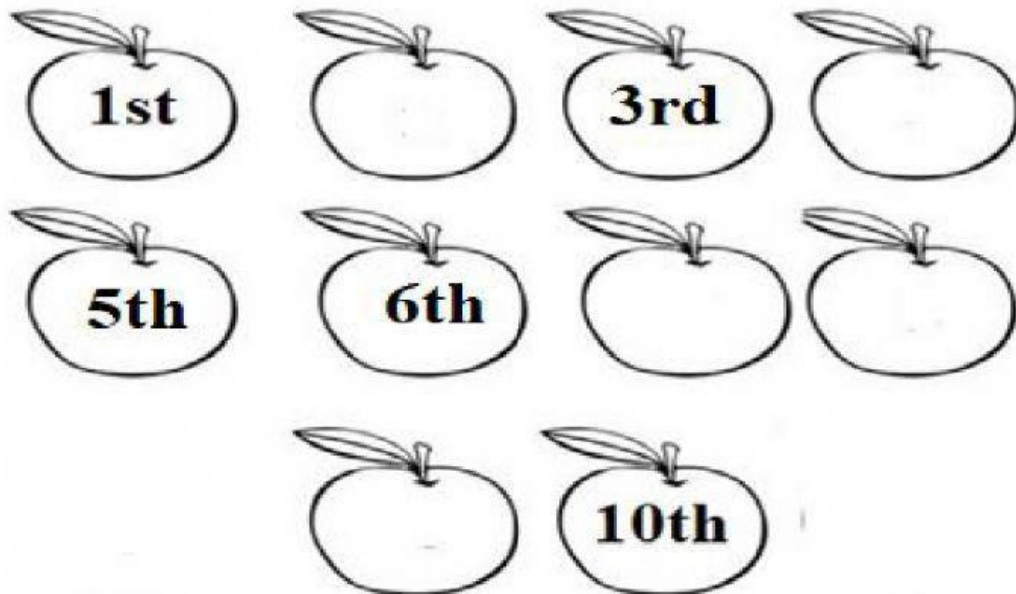




Q4. Select if the number on the kite is even or odd.



Q2. Fill in the missing ordinal numbers to show the positions.



➤ **Tick the 3rd and 9th apple.**

Even and Odd Numbers	
Even Numbers end in	Odd Numbers end in
0 2 4	1 3
6 8	5 7 9
Examples: 4, 56, 730	Examples: 9, 83, 641