

Nama : _____
Tanggal : _____



PLACE VALUE: ONES AND TENS

August 27th, 2020

SD Tumbuh – Jogja Educational Spirit
Kelas : Lower B
Inquiry : Innovation And Technology
Mata Pelajaran : CIPP Math

Teacher's feedback:

Nama : _____
Tanggal : _____

Hello my Lower B friends? How are you today?
Are you ready to learn CIPP Math with me?

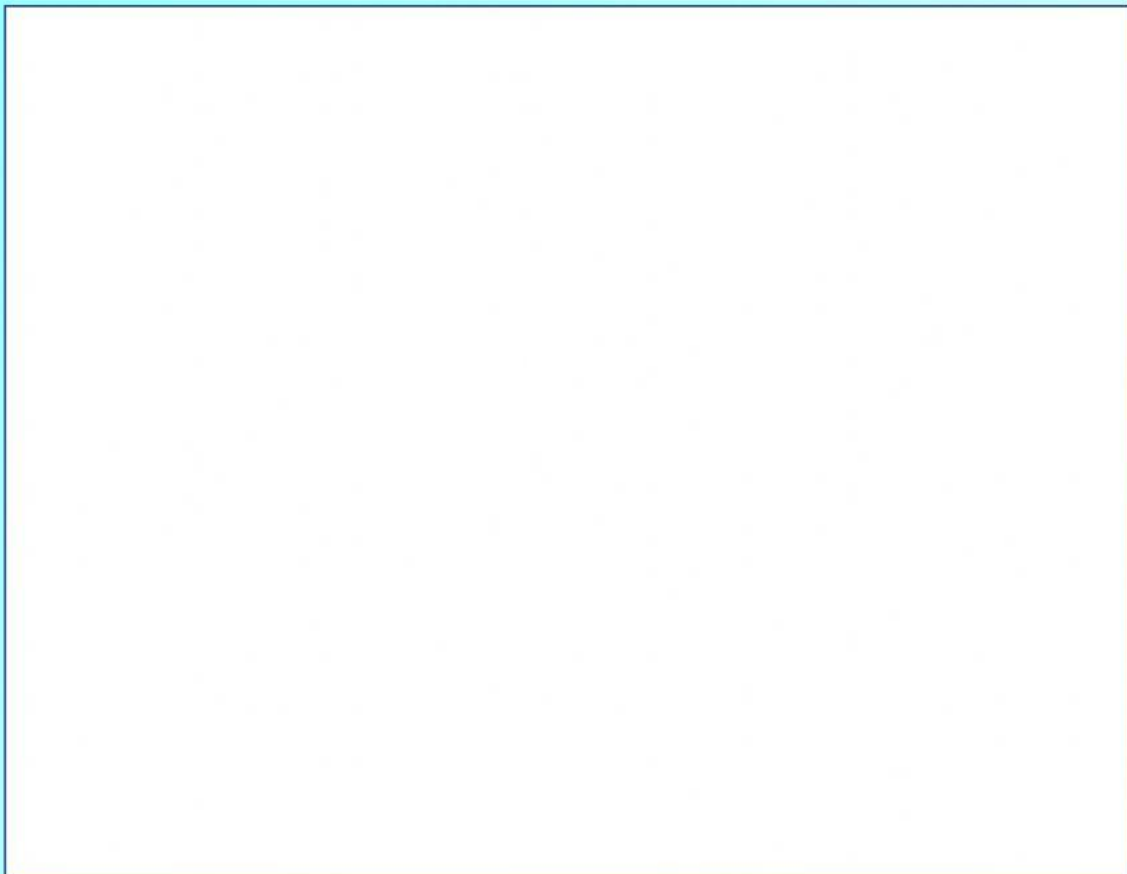


Today we are going to learn about **PLACE
VALUE : ones and tens.**



Do you still remember what have we learned 3
weeks a go?

I would remind you by the video below.



Nama : _____
Tanggal : _____

Do the worksheet below!

Understand Place Value

Grade 1

Fill in the table.



	Picture	Number	How many tens?	How many ones?
1.		—	2	—
2.		40	—	—
3.		—	0	—
4.		—	—	3
5.		—	—	—



Improve your math score by visiting us at
www.argoprep.com/k8



Nama : _____
Tanggal : _____

Understand Place Value

Grade 1



1.

Which digit is in the TENS place in 18?

ANSWER



2.

Which digit is in the TENS place in 85?

ANSWER



3.

Which digit is in the ONES place in 71?

ANSWER



4.

Which digit is in the ONES place in 90?

ANSWER



5.

Which digit is in the ONES place in 13?

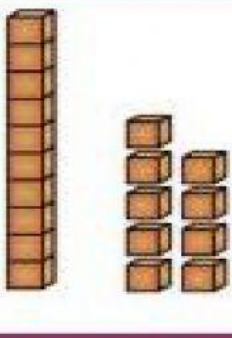
ANSWER




Improve your math score by visiting us at
www.argoprep.com/k8

Nama : _____
 Tanggal : _____

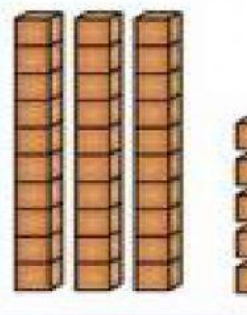
Choose the correct answer!



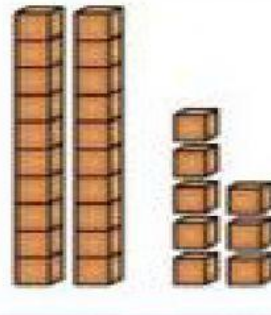
91 19 18




42 44 24



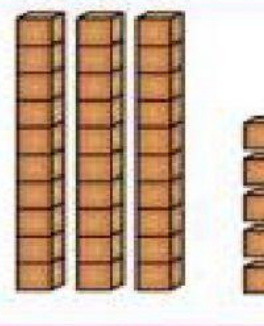
43 38 36



28 24 27



44 35 43



27 39 37