


















Number of students in each class that have flown on an airplane

Mrs. Jones	 
Mrs. Lake	   
Mrs. Smith	  
Mrs. James	     
Mrs. Henry	

Key:  = 1 student

1. How many total students have flown on an airplane?
2. How many students in Mrs. Lake's class have flown on an airplane?
3. How many more students in Mrs. James's class have flown on airplane than in Mrs. Jones's class?
4. How many students in Mrs. Smith's and Mrs. Henry's class have flown on an airplane?