



**CORAL INTERNATIONAL BILINGUAL SCHOOL AND INSTITUTE**

**Math Evaluation**

**Mr. Enrique Guandique**

**Student's name:** \_\_\_\_\_ **6<sup>th</sup> Grade Section: A**

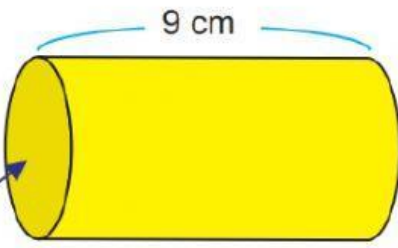
**Date:** \_\_\_\_\_ **Value:10%**

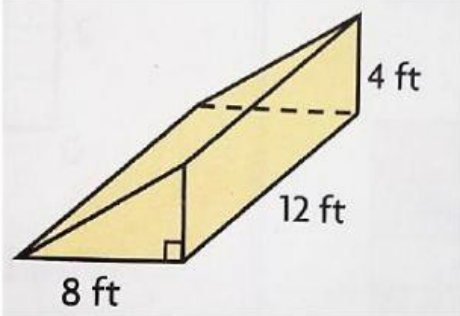
**Instructions:** Use PENCIL to solve each exercise. Work in order, and clear.

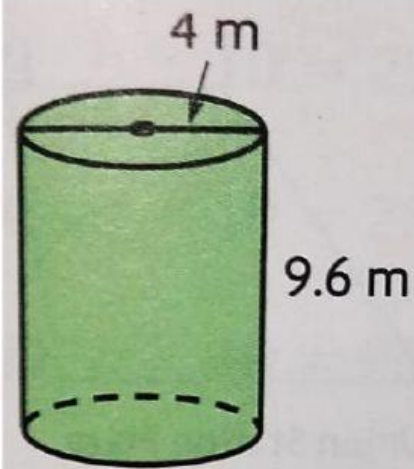
**Show the process in each exercise.**

**Practice Type**

1. Find the volume for each solid figure:

a.  \_\_\_\_\_  $cm^3$

b.  \_\_\_\_\_  $ft^3$

c.  \_\_\_\_\_  $m^3$