

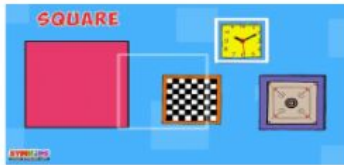


Topic- Identifying Shapes

Std- 1st Name- _____



Observe the shapes. Count things of each shapes and write it in the box.

Triangle- _____

Rectangle- _____

Circle- _____

Square- _____