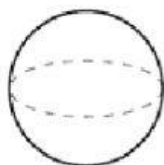
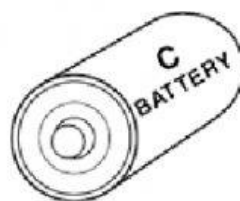


Solid Figures

Three-dimensional objects are called **solid figures**. Solid figures are found in the world in many shapes and sizes.

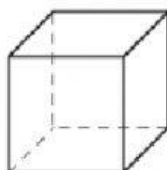
The battery is an example of a **cylinder**. A **solid figure** is named according to its features.



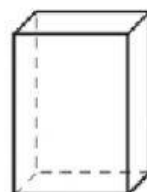
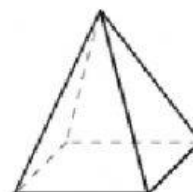
Sphere



Cone



Cube

Rectangular
Prism

Pyramid

Write the name of the **solid figure** that each object looks like.

1.



2.



3.



4.



5.



6.



7.



8.



9.



10.